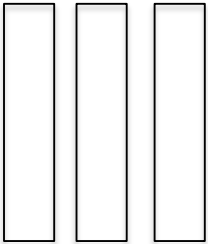







Name: \_\_\_\_\_

# roll it! make it! expand it!

Roll two dice. Write down each number. Draw the tens and ones. Write the expanded notation equation.

Roll It	Make It		Expand It								
<table border="1"><tr><td>Tens</td><td>Ones</td></tr><tr><td>3</td><td>7</td></tr></table>	Tens	Ones	3	7	<table border="1"><tr><td>Tens</td></tr><tr><td></td></tr></table>	Tens		<table border="1"><tr><td>Ones</td></tr><tr><td></td></tr></table>	Ones		$30 + 7 = 37$
Tens	Ones										
3	7										
Tens											
											
Ones											
											
<table border="1"><tr><td>Tens</td><td>Ones</td></tr><tr><td></td><td></td></tr></table>	Tens	Ones			<table border="1"><tr><td>Tens</td></tr><tr><td></td></tr></table>	Tens		<table border="1"><tr><td>Ones</td></tr><tr><td></td></tr></table>	Ones		$\_\_\_ + \_\_\_ = \_\_\_$
Tens	Ones										
Tens											
Ones											
<table border="1"><tr><td>Tens</td><td>Ones</td></tr><tr><td></td><td></td></tr></table>	Tens	Ones			<table border="1"><tr><td>Tens</td></tr><tr><td></td></tr></table>	Tens		<table border="1"><tr><td>Ones</td></tr><tr><td></td></tr></table>	Ones		$\_\_\_ + \_\_\_ = \_\_\_$
Tens	Ones										
Tens											
Ones											
<table border="1"><tr><td>Tens</td><td>Ones</td></tr><tr><td></td><td></td></tr></table>	Tens	Ones			<table border="1"><tr><td>Tens</td></tr><tr><td></td></tr></table>	Tens		<table border="1"><tr><td>Ones</td></tr><tr><td></td></tr></table>	Ones		$\_\_\_ + \_\_\_ = \_\_\_$
Tens	Ones										
Tens											
Ones											
<table border="1"><tr><td>Tens</td><td>Ones</td></tr><tr><td></td><td></td></tr></table>	Tens	Ones			<table border="1"><tr><td>Tens</td></tr><tr><td></td></tr></table>	Tens		<table border="1"><tr><td>Ones</td></tr><tr><td></td></tr></table>	Ones		$\_\_\_ + \_\_\_ = \_\_\_$
Tens	Ones										
Tens											
Ones											

Name: \_\_\_\_\_

# roll it! make it! expand it!

Roll two dice. Write down each number. Draw the tens and ones. Write the expanded notation equation.

Roll It		Make It		Expand It
Tens	Ones	Tens	Ones	$\underline{\quad} + \underline{\quad} = \underline{\quad}$
<input type="text"/>	<input type="text"/>			
Tens	Ones	Tens	Ones	$\underline{\quad} + \underline{\quad} = \underline{\quad}$
<input type="text"/>	<input type="text"/>			
Tens	Ones	Tens	Ones	$\underline{\quad} + \underline{\quad} = \underline{\quad}$
<input type="text"/>	<input type="text"/>			
Tens	Ones	Tens	Ones	$\underline{\quad} + \underline{\quad} = \underline{\quad}$
<input type="text"/>	<input type="text"/>			
Tens	Ones	Tens	Ones	$\underline{\quad} + \underline{\quad} = \underline{\quad}$
<input type="text"/>	<input type="text"/>			