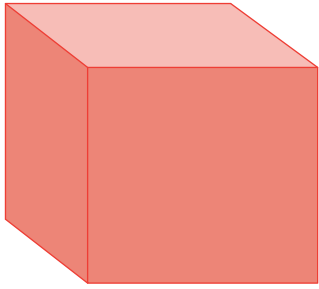


Name : \_\_\_\_\_

## Identifying 3D Shapes


Identify each 3D shape, and check the appropriate option.

1)




- sphere
- cube
- pyramid

2)



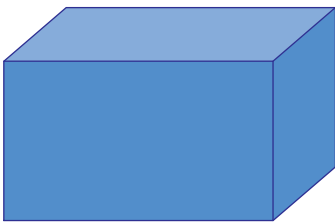
- cylinder
- prism
- cone

3)



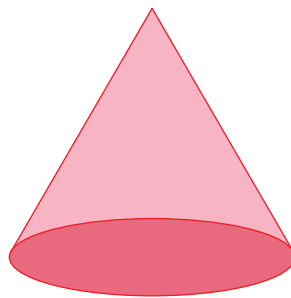
- prism
- pyramid
- sphere

4)



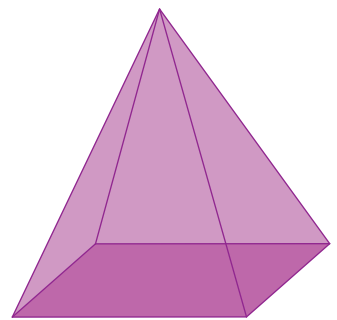
- cone
- pyramid
- prism

5)



- prism
- cone
- cube

6)



- pyramid
- prism
- cylinder

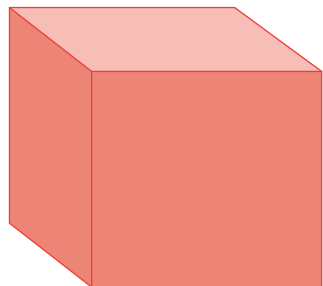
# Answer key

Name : \_\_\_\_\_

## Identifying 3D Shapes


Identify each 3D shape, and check the appropriate option.

1)




- sphere
- cube
- pyramid

2)



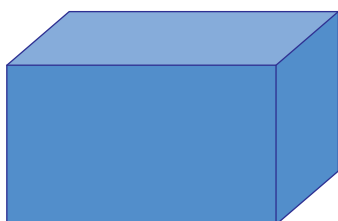
- cylinder
- prism
- cone

3)



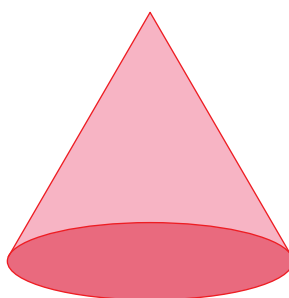
- prism
- pyramid
- sphere

4)



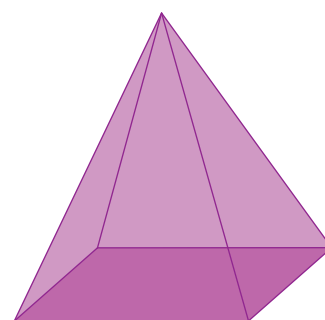
- cone
- pyramid
- prism

5)



- prism
- cone
- cube

6)



- pyramid
- prism
- cylinder