

Name: \_\_\_\_\_


Date: \_\_\_\_\_

Score: \_\_\_\_\_

## Find Total Value


Count the value of all coins. Write the value of each coin and the total amount.

1)



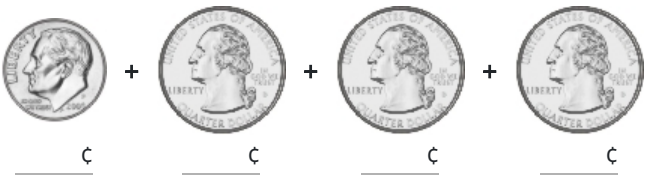
     ¢ +      ¢ = Total     

2)




     ¢ +      ¢ +      ¢ = Total     

3)




     ¢ +      ¢ +      ¢ +      ¢ = Total     

4)




     ¢ +      ¢ = Total     

5)



     ¢ +      ¢ +      ¢ = Total     

6)



     ¢ +      ¢ +      ¢ +      ¢ = Total


7)



8)



9)



10)

