

Name _____

Date _____


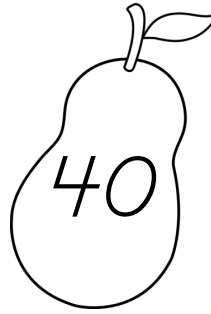

Numbers and Operations in Base Ten

MCC1.NBT.3 Compare 2 two-digit numbers based on meaning of the tens and ones digits, recording the results of comparisons with the symbols $>$, $=$, and $<$.

Student Score: _____ Expectation for the quarter: 3*

*Please refer to rubric on back

Fill in the blanks using the numbers below. Use each number once.



1. The greatest number is _____.
2. The least number is _____.
3. 35 is greater than _____.
4. 27 is less than _____.

Fill in the blanks.

5. Name three numbers that are greater than 27 but less than 35.

_____, _____, _____

6. Name three numbers that are less than 38 but greater than 26.

_____, _____, _____