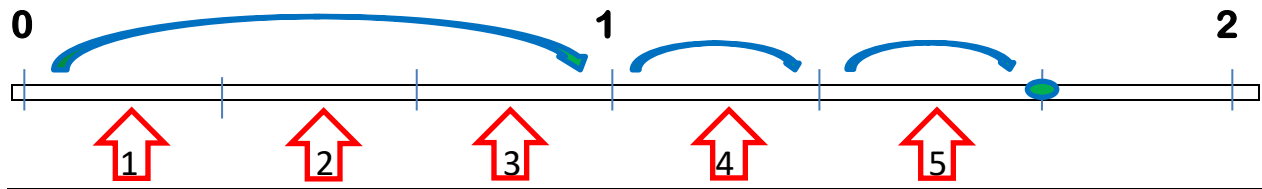


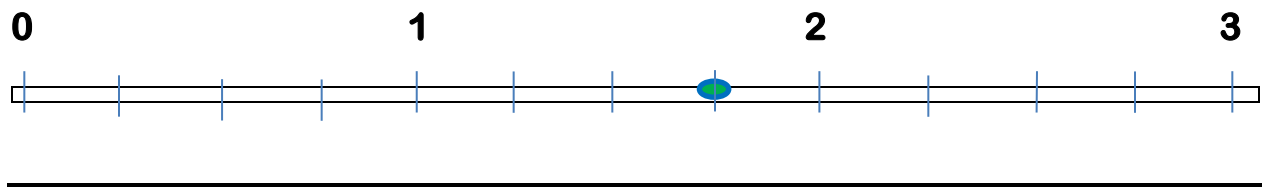
Representing Mixed Numbers and Fractions on a Number Line

Represent the mixed number on the number line. Write the number in two ways.

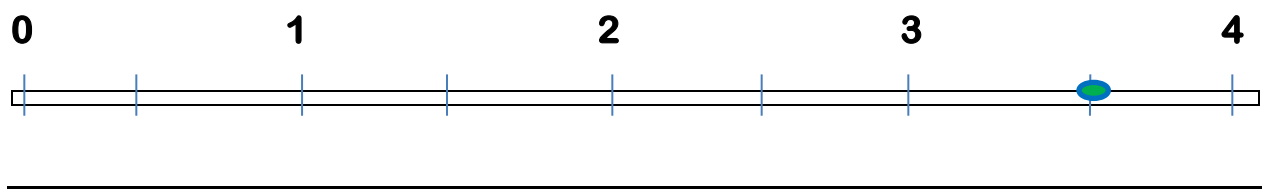
$1\frac{2}{3}$	=	$\frac{5}{3}$
----------------	---	---------------



—	=	—
---	---	---



—	=	—
---	---	---



—	=	—
---	---	---

