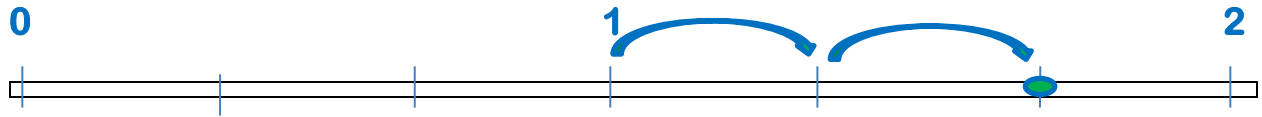


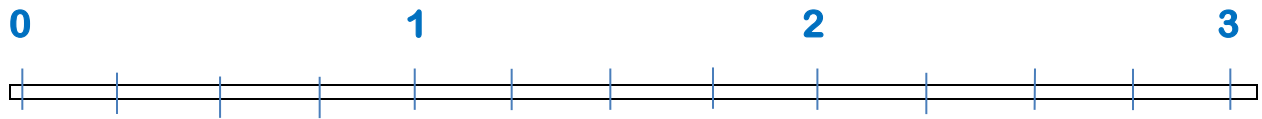
More Mixed Numbers on a Number Line

Represent the mixed number on the number line.

$$1\frac{2}{3}$$



$$2\frac{2}{4}$$

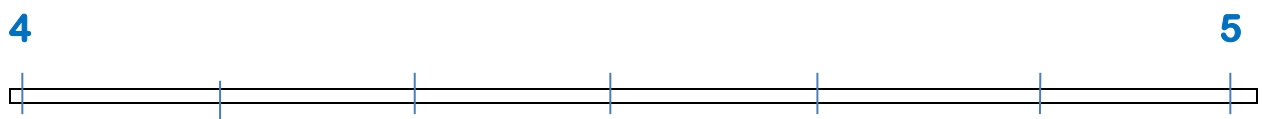


Represent the mixed number on the section of the number line.

$$3\frac{5}{8}$$



$$4\frac{3}{6}$$



$$8\frac{3}{4}$$



$$3\frac{2}{3}$$

